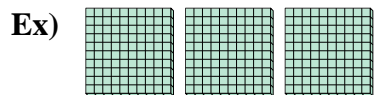
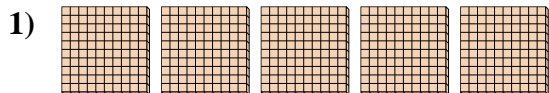





Utilisez les blocs pour déterminer les quantités totales.




  3   centaines =   30   dizaines =   300   unités



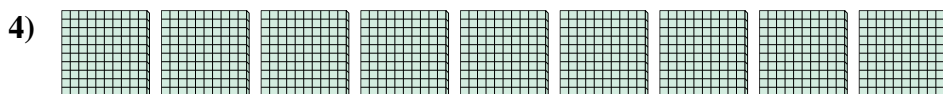
       centaines =        dizaines =        unités




       centaines =        dizaines =        unités




       centaines =        dizaines =        unités



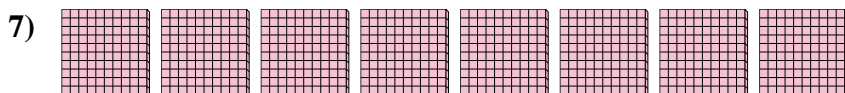
       centaines =        dizaines =        unités




       centaines =        dizaines =        unités



       centaines =        dizaines =        unités



       centaines =        dizaines =        unités



       centaines =        dizaines =        unités

**Réponses**

Ex.   3     30     300  

1. \_\_\_\_\_

2. \_\_\_\_\_

3. \_\_\_\_\_

4. \_\_\_\_\_

5. \_\_\_\_\_


6. \_\_\_\_\_


7. \_\_\_\_\_


8. \_\_\_\_\_





Utilisez les blocs pour déterminer les quantités totales.


Ex)    
3 centaines = 30 dizaines = 300 unités


1)    
5 centaines = 50 dizaines = 500 unités

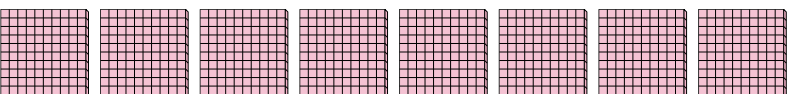
2)    
7 centaines = 70 dizaines = 700 unités


3)    
4 centaines = 40 dizaines = 400 unités

4)    
9 centaines = 90 dizaines = 900 unités

5)    
2 centaines = 20 dizaines = 200 unités

6)    
6 centaines = 60 dizaines = 600 unités

7)    
8 centaines = 80 dizaines = 800 unités

8)    
1 centaines = 10 dizaines = 100 unités

**Réponses**

Ex.	<u>3</u>	<u>30</u>	<u>300</u>
1.	<u>5</u>	<u>50</u>	<u>500</u>
2.	<u>7</u>	<u>70</u>	<u>700</u>
3.	<u>4</u>	<u>40</u>	<u>400</u>
4.	<u>9</u>	<u>90</u>	<u>900</u>
5.	<u>2</u>	<u>20</u>	<u>200</u>
6.	<u>6</u>	<u>60</u>	<u>600</u>
7.	<u>8</u>	<u>80</u>	<u>800</u>
8.	<u>1</u>	<u>10</u>	<u>100</u>